

Preview Unit 4 – Lesson Worksheet |

Start again

1 

Marks: 1

What month has the coldest average (mean) temperature in Fairbanks?

Choose one answer.

- a. January
- b. February
- c. March
- d. April
- e. May
- f. June
- g. July
- h. August
- i. September
- j. October
- k. November
- l. December

2 

Marks: 1

What month has the warmest average (mean) temperature in Fairbanks?

Choose one answer.

- a. January
- b. February
- c. March
- d. April
- e. May
- f. June
- g. July
- h. August
- i. September
- j. October
- k. November
- l. December

3 

Marks: 1

What year had the warmest mean annual temperature in Fairbanks?

Choose one answer.

- a. 1940
- b. 1956
- c. 1981
- d. 2002

4 

Marks: 1

What year had the coldest mean annual temperature in Fairbanks?

Choose one answer.

- a. 1940
- b. 1956
- c. 1981
- d. 2002

5 

Marks: 1

What is the temperature range (difference) between the mean coldest month and mean warmest month for Fairbanks?

Choose one answer.

- a. 100.1 °F
- b. 71.5 °F
- c. 45.6 °F
- d. 23.9 °F

6 

Marks: 1

Based on mean annual temperatures, which of the following is true for Fairbanks?

Choose one answer.

- a. The climate in Fairbanks is warming.
- b. The climate in Fairbanks is cooling.
- c. The climate in Fairbanks is remaining the same.

7 

Marks: 1

What month has the coldest average (mean) temperature in Annette?

Choose one answer.

- a. January
- b. February
- c. March
- d. April
- e. May
- f. June
- g. July
- h. August
- i. September
- j. October
- k. November
- l. December


8 

Marks: 1

What month has the warmest average (mean) temperature in Annette?

Choose one answer.


- a. July
- b. March
- c. January
- d. September
- e. June
- f. August
- g. May
- h. November
- i. December
- j. February
- k. April
- l. October

9  What is the temperature range (difference) between the **mean coldest** month and **mean warmest** month for Annette?

Marks: 1

Choose one answer.


- a. 100.1 °F
- b. 71.5 °F
- c. 45.6 °F
- d. 23.9 °F

10  Is the temperature range for Annette typical of a maritime climate?

Marks: 1

Choose one answer.


- a. Yes
- b. No

11  In Fairbanks, what is the highest maximum wind speed (mph)?

Marks: 1

Choose one answer.


- a. 45 mph
- b. 20 mph
- c. 50 mph
- d. 25 mph

12  In Fairbanks, which month has the highest maximum wind speed?

Marks: 1

Choose one answer.


- a. January
- b. February
- c. March
- d. April
- e. May
- f. June
- g. July
- h. August
- i. September
- j. October
- k. November
- l. December

13  In Fairbanks, what is the lowest maximum wind speed (mph)?

Marks: 1

Choose one answer.

- a. 20 mph
- b. 45 mph
- c. 25 mph
- d. 50 mph

14  In Fairbanks, which month has the lowest maximum wind speed?

Marks: 1

Choose one answer.

- a. January
- b. February
- c. March
- d. April

- e. May
- f. June
- g. July
- h. August
- i. September
- j. October
- k. November
- l. December

15 

Marks: 1

Does the percentage of calm weather in Fairbanks seem to follow a seasonal trend?

Choose one answer.

- a. Yes
- b. No

16 

Marks: 1

What is the approximate range (lowest to highest) of average monthly wind speed in Fairbanks?

Choose one answer.

- a. 0-3 mph
- b. 3-7 mph
- c. 8-19 mph
- d. 20-50 mph

17 

Marks: 1

What is the predominant wind direction in Fairbanks?

Choose one answer.

- a. West
- b. East
- c. South
- d. North

18 

Marks: 1

In Annette, what is the highest maximum wind speed (mph)?

Choose one answer.

- a. 45 mph
- b. 25 mph
- c. 20 mph
- d. 50 mph

19 

Marks: 1

In Annette, which month has the highest wind maximum speed?

Choose one answer.

- a. January
- b. February
- c. March
- d. April
- e. May
- f. June
- g. July
- h. August
- i. September
- j. October
- k. November